

Please write clearly in block capitals.

Centre number

Candidate number

Surname _____

Forename(s) _____

Candidate signature _____

GCSE MATHEMATICS

F

Foundation Tier Paper 1 Non-Calculator

Thursday 25 May 2017

Morning


Time allowed: 1 hour 30 minutes

Materials

For this paper you must have:

- mathematical instruments.

You must **not** use a calculator.



Instructions

- Use black ink or black ball-point pen. Draw diagrams in pencil.
- Answer **all** questions.
- You must answer the questions in the spaces provided. Do not write outside the box around each page or on blank pages.
- Do all rough work in this book. Cross through any work you do not want to be marked.

Information

- The marks for questions are shown in brackets.
- The maximum mark for this paper is 80.
- You may ask for more answer paper, graph paper and tracing paper. These must be tagged securely to this answer book.

Advice

- In all calculations, show clearly how you work out your answer.

For Examiner's Use	
Pages	Mark
2–3	
4–5	
6–7	
8–9	
10–11	
12–13	
14–15	
16–17	
18–19	
20–21	
22–23	
TOTAL	



Answer **all** questions in the spaces provided

1 How many minutes are there in $3\frac{1}{2}$ hours?

Circle your answer.

[1 mark]

180.5

210

330

350

2 Work out $\frac{1}{4} + 0.5$

Circle your answer.

[1 mark]

0.30

0.6

0.75

0.9

3 Which of these shapes has the most sides?

Circle your answer.

[1 mark]

Hexagon

Octagon

Rhombus

Trapezium



4 Solve $x - 3 = 0$

Circle your answer.

[1 mark]

$x = -3$

$x = 0$

$x = \frac{1}{3}$

$x = 3$

5 Work out 58×73

[3 marks]

Answer _____

7

Turn over ►



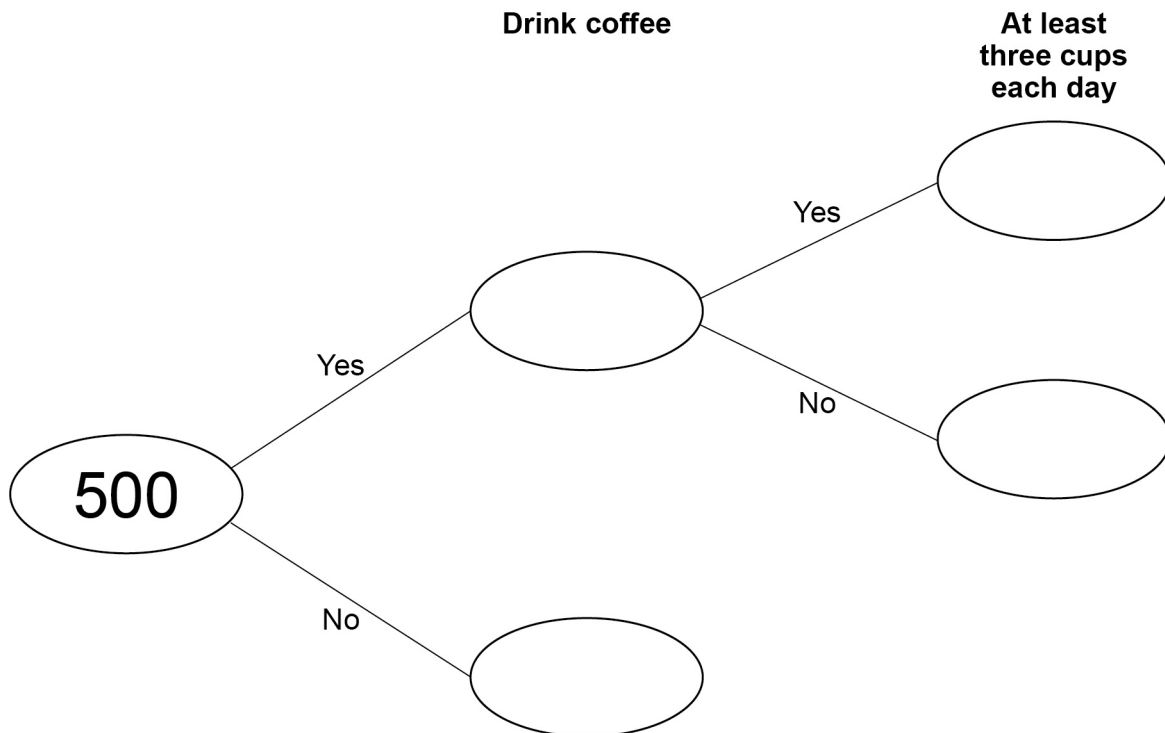
6 500 people are asked if they drink coffee.

$\frac{9}{10}$ say Yes.

20% of the people who say Yes drink at least three cups each day.

6 (a) Complete the frequency tree.

[4 marks]



- 6 (b)** What fraction of the 500 people drink at least three cups of coffee each day?
Give your answer in its simplest form.

[2 marks]

Answer _____

- 7** By rounding each number to the nearest 10,

estimate the answer to $\frac{61 \times 47}{102}$

You **must** show your working.

[2 marks]

Answer _____

Turn over for the next question

Turn over ►



8 Nadia has £5 to buy pencils and rulers.

Prices	
Pencils	8p each
Rulers	30p each

She says,

“I will buy 15 pencils.

Then I will buy as many rulers as possible.

With my change I will buy more pencils.”

How many pencils and how many rulers does she buy?

[6 marks]

Answer _____ pencils, _____ rulers



9 Work out $25.68 \div 12$

[2 marks]

Answer _____

10 Work out $\frac{3}{8} \times 11$

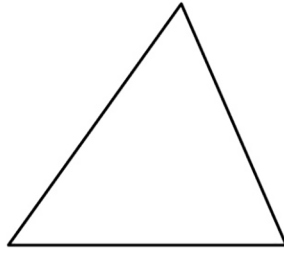
Give your answer as a mixed number.

[2 marks]

Answer _____




11 A triangle has perimeter 32 cm



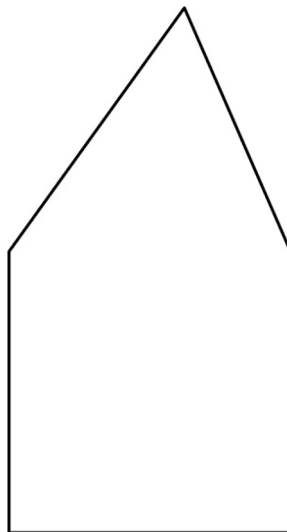
Not drawn
accurately

A square has perimeter 40 cm



Two sides of the shapes are put together to make a pentagon.

Not drawn
accurately



Work out the perimeter of the pentagon.

[4 marks]

Answer _____ cm

Turn over for the next question

4

Turn over ►



12 A football team has P points.

$$P = 3W + D$$

W is the number of wins

D is the number of draws

12 (a) A team has 6 wins and 2 draws.

How many points does the team have?

[1 mark]

Answer _____

12 (b) After 33 games a different team has 53 points.
11 games were draws.

How many games has this team **lost**?

[4 marks]

Answer _____



13

$$2 + 0 + 1 + 7 = 10$$

Make the following calculations correct.

Use only the symbols $+$, $-$, \times , \div and $()$

[3 marks]

$$2 \quad 0 \quad 1 \quad 7 = -4$$

$$2 \quad 0 \quad 1 \quad 7 = 0$$

$$2 \quad 0 \quad 1 \quad 7 = 2^4$$

Turn over for the next question

Turn over ►

- 14** A number is picked at random from the first four **prime** numbers.
A number is picked at random from the first four **square** numbers.
The two numbers are added to get a score.

- 14 (a)** Complete the table.

[4 marks]

		Square numbers				
		+	1	4	9	
Prime numbers	2					
	3			12		
	7					

- 14 (b)** What is the probability that the score is a **prime** number?

[1 mark]

Answer _____



15

In a school show,

girls : boys = 1 : 1

girls who sing : girls who do not sing = 1 : 2

8 girls **sing** in the show.

How many students are in the show altogether?

[3 marks]

Answer _____

Turn over for the next question**Turn over ►**

16 P and Q are points on the line $3x + 2y = 6$

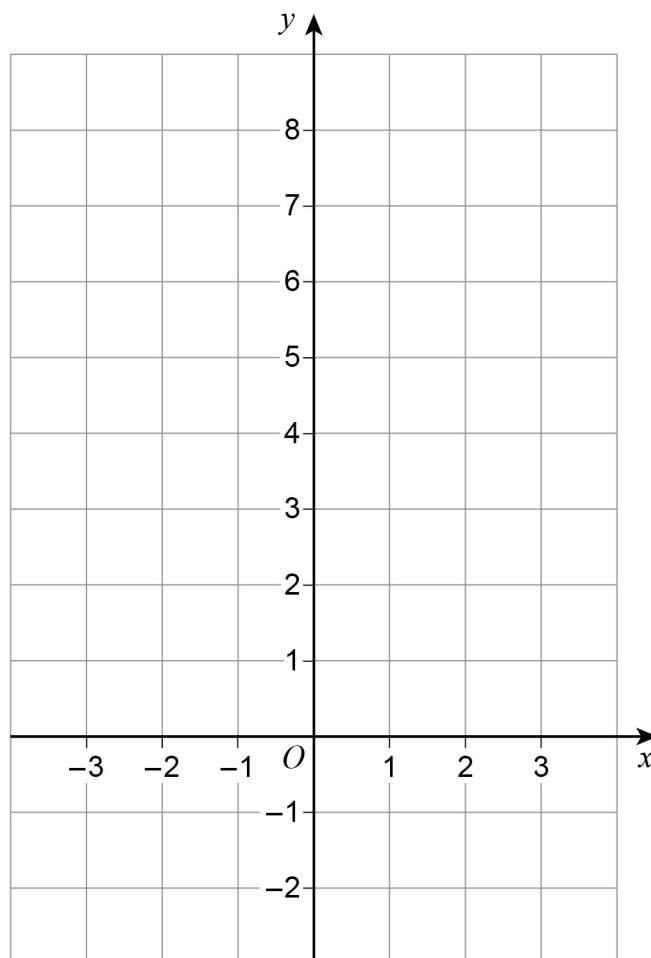
16 (a) Complete the coordinates of P and Q .

[2 marks]

$P (0 , \underline{\hspace{1cm}})$ $Q (\underline{\hspace{1cm}} , 0)$

16 (b) Draw the line $3x + 2y = 6$ for values of x from -3 to 3

[2 marks]



17 Circle the expression which does **not** simplify to y^3

[1 mark]

$$y \times y \times y$$

$$y^4 \div y$$

$$y^2 \times y$$

$$y^6 \div y^2$$

18 Write the number six million five thousand two hundred in standard form.

[2 marks]

Answer _____

Turn over for the next question

7

Turn over ►



19 (a) Use $8 \text{ km/h} = 5 \text{ mph}$ to convert 96 km/h to mph

[2 marks]

Answer _____ mph

19 (b) $x \text{ km/h} = y \text{ mph}$

Use $8 \text{ km/h} = 5 \text{ mph}$ to write a formula for y in terms of x .


[2 marks]

Answer _____



20

Here is a circle touching a square.

Not drawn
accuratelyThe area of the square is 64 cm^2

Work out the area of the circle.

Give your answer in terms of π .**[3 marks]**

Answer _____ cm^2 **Turn over for the next question****Turn over ►**

21 Billy wants to buy these tickets for a show.

4 adult tickets at £15 each

2 child tickets at £10 each

A 10% booking fee is added to the ticket price.

3% is then added for paying by credit card.

Work out the **total** charge for these tickets when paying by credit card.

[5 marks]

Answer £ _____



22 (a) Density = $\frac{\text{mass}}{\text{volume}}$

The mass of solid A is 6 times the mass of solid B.

The volume of solid A is 3 times the volume of solid B.

Complete the sentence.

[1 mark]

The density of solid A is _____ times the density of solid B.

22 (b) Average speed = $\frac{\text{distance}}{\text{time}}$

If the distance is halved and the time is doubled, what happens to the average speed?

Circle your answer.

[1 mark]

$\times 2$ $\times 4$ no change $\div 2$ $\div 4$

Turn over for the next question



23 A regular polygon has an exterior angle of 20°

Work out the number of sides of the polygon.

[2 marks]

Answer _____

24 $\frac{1}{2} : \frac{2}{3} = x : 1$

Circle the value of x .

[1 mark]

$$\frac{1}{3}$$

$$\frac{3}{5}$$

$$\frac{3}{4}$$

$$\frac{4}{3}$$



25

The table shows information about the times for 10 people to complete a task.

Time, t (minutes)	Frequency
$0 < t \leq 20$	1
$20 < t \leq 40$	6
$40 < t \leq 60$	3

These statements are about the mean and range of the actual times.

Tick the correct box for each statement.

[4 marks]

	True	False
The mean could be less than 20 minutes	<input type="checkbox"/>	<input type="checkbox"/>
The mean could be more than 40 minutes	<input type="checkbox"/>	<input type="checkbox"/>
The mean could be less than 40 minutes	<input type="checkbox"/>	<input type="checkbox"/>
The range could be more than 40 minutes	<input type="checkbox"/>	<input type="checkbox"/>
The range could be less than 40 minutes	<input type="checkbox"/>	<input type="checkbox"/>
The range could be more than 60 minutes	<input type="checkbox"/>	<input type="checkbox"/>

Turn over ►



- 26** Write 36 as a product of prime factors.
Give your answer in index form.

[3 marks]

Answer _____

- 27** Circle the value of $\cos 90^\circ$

[1 mark]

0

$\frac{1}{2}$

$\frac{\sqrt{3}}{2}$

1



28 Solve the simultaneous equations.

$$2x + y = 18$$

$$x - y = 6$$

[3 marks]

Answer _____

END OF QUESTIONS

7



There are no questions printed on this page

**DO NOT WRITE ON THIS PAGE
ANSWER IN THE SPACES PROVIDED**

Copyright Information

For confidentiality purposes, from the November 2015 examination series, acknowledgements of third party copyright material will be published in a separate booklet rather than including them on the examination paper or support materials. This booklet is published after each examination series and is available for free download from www.aqa.org.uk after the live examination series.

Permission to reproduce all copyright material has been applied for. In some cases, efforts to contact copyright-holders may have been unsuccessful and AQA will be happy to rectify any omissions of acknowledgements. If you have any queries please contact the Copyright Team, AQA, Stag Hill House, Guildford, GU2 7XJ.

Copyright © 2017 AQA and its licensors. All rights reserved.

